



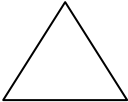


# Holiday Homework

Class - II<sup>nd</sup>

Subject - Maths

---

1. Write the names of the items inside or outside the house that matches the given shapes :-

Shape	Shape name	Name of Articles		
				
				
				
				
				

2. Fill in the blanks :-

- (a) The symbol \_\_\_\_\_ is the sign of division.
- (b) \_\_\_\_\_ is repeated subtraction of the same number.
- (c) The standard unit for measuring length is \_\_\_\_\_.
- (d)  $1000 \text{ m} =$  \_\_\_\_\_.
- (e) A fraction has two parts - numerator and \_\_\_\_\_.

**3. Make group and write the correct number :-**

(a) Make 3 equal groups of 12 mangos :-



$$\boxed{\phantom{00}} \div \boxed{\phantom{00}} = \boxed{\phantom{00}}$$

(b) Make 2 equal groups of 10 cups :-



$$\boxed{\phantom{00}} \div \boxed{\phantom{00}} = \boxed{\phantom{00}}$$

**4. Tick the correct unit that should be used for measuring :-**

- a) Length of portable TV. ( m / cm )  
b) Weight of Cycle. ( g / kg )  
c) Capacity of a bucket. ( l / ml )

**5. Tick the correct choice :-**

(a) 4 rupees 35 paise is correctly written as -

- (i) ₹ 40.35 (ii) ₹ 43.50 (iii) ₹ 4.35

(b) 55 rupees 70 paise is correctly written as -

- (i) ₹ 55.70 (ii) ₹ 5.57 (iii) ₹ 55.75

(c) 72 rupees 5 paise is correctly written as -

- (i) ₹ 72.50 (ii) ₹ 72.05 (iii) ₹ 7.25

**6. Match the following :-**

(a)  $88 \div 4$

(i) 23

(b)  $63 \div 3$

(ii) 22

(c)  $56 \div 4$

(iii) 17